



MATHEMATICS CH -14 DIVISION READINESS

Name: _____

Date: _____

Class: II Sec: ____

1) Divide the 8 apples into groups of 2. How many groups? ____



Division sentence: $8 \div 2 = \underline{\quad}$

2) Divide the 6 oranges into groups of 3. How many groups? ____



Division sentence: $6 \div 3 = \underline{\quad}$

3) Divide the 12 bananas into groups of 4. How many groups? ____



Division sentence: $12 \div 4 = \underline{\quad}$

4) Divide the 5 pears into groups of 5. How many groups? ____



Division sentence: $5 \div 5 = \underline{\quad}$

5) Divide the 9 nectarines into groups of 3. How many groups? ____




Division sentence: $9 \div 3 = \underline{\quad}$




DIVISION FACTS



$6 \div 2 = 3$



$\square \div \square = \square$




$\square \div \square = \square$



$\square \div \square = \square$



$\square \div \square = \square$



$\square \div \square = \square$




$\square \div \square = \square$



$\square \div \square = \square$



$\square \div \square = \square$



$\square \div \square = \square$



$\square \div \square = \square$